

**Paper Reference 4MA1/1F**  
**Pearson Edexcel**  
**International GCSE**

**Mathematics A**  
**Paper 1F**  
**(Calculator)**  
**Foundation Tier**

**Tuesday 19 May 2020 – Morning**

**Diagram Book**

**In the boxes below, write your name,  
centre number and candidate number.**

<b>Surname</b>					
<b>Other names</b>					
<b>Centre Number</b>					
<b>Candidate Number</b>					

# INSTRUCTIONS

There may be spare copies of some diagrams in case you need them.

**THIS DIAGRAM BOOK MUST BE  
RETURNED WITH THE QUESTION  
PAPER AT THE END OF THE  
EXAMINATION.**

# **Contents**

## **Page**

**5 Question 1**

**6 Question 2**

**7 Question 2 (Spare copy)**

**8 Question 3(a)**

**9 Questions 3(b) and 3(c)  
(NOT accurately drawn)**

**10 Question 4**

**11 Question 4 (Spare copy)**

**12 Question 4(d)  
(NOT accurately drawn)**

**13 Question 8**

**14 Question 8 (Spare copy)**

**(continued on the next page)**

**Contents continued.**

**Page**

**15 Question 13(a)**

**16 Question 13(a) (Spare copy)**

**17 Question 13(b)**

**18 Question 14**

**19 Question 16**

**20 Question 16 (Spare copy)**

**21 Question 21 (NOT accurately drawn)**

Question 1

Country	Crude oil produced per day (number of barrels)
Australia	322 300
Gabon	213 300
South Sudan	220 000
Thailand	248 200
Vietnam	333 400

Question 2

Key:

represents 20 books

Monday	<div><div><div></div><div></div><div></div><div></div></div><div><div><div></div><div></div><div></div><div></div></div><div><div><div></div><div></div><div></div><div></div></div><div><div><div></div><div></div><div></div><div></div></div></div></div></div></div>	
Tuesday	<div><div><div></div><div></div><div></div><div></div></div><div><div><div></div><div></div><div></div><div></div></div><div><div><div></div><div></div><div></div><div></div></div><div><div><div></div><div></div><div></div><div></div></div></div><div><div><div></div><div></div><div></div><div></div></div></div></div></div></div>	
Wednesday	<div><div><div></div><div></div><div></div><div></div></div><div><div><div></div><div></div><div></div><div></div></div><div><div><div></div><div></div><div></div><div></div></div><div><div><div></div><div></div><div></div><div></div></div></div><div><div><div></div><div></div><div></div><div></div></div><div><div><div></div><div></div><div></div><div></div></div><div><div><div></div><div></div><div></div><div></div></div><div><div><div></div><div></div><div></div><div></div></div></div></div></div></div></div></div></div>	
Thursday	<div><div><div></div><div></div><div></div><div></div></div><div><div><div></div><div></div><div></div><div></div></div><div><div><div></div><div></div><div></div><div></div></div><div><div><div></div><div></div><div></div><div></div></div></div><div><div><div></div><div></div><div></div><div></div></div><div><div><div></div><div></div><div></div><div></div></div><div><div><div></div><div></div><div></div><div></div></div><div><div><div></div><div></div><div></div><div></div></div></div></div></div></div></div></div></div>	
Friday		


Question 2

Key:

represents 20 books

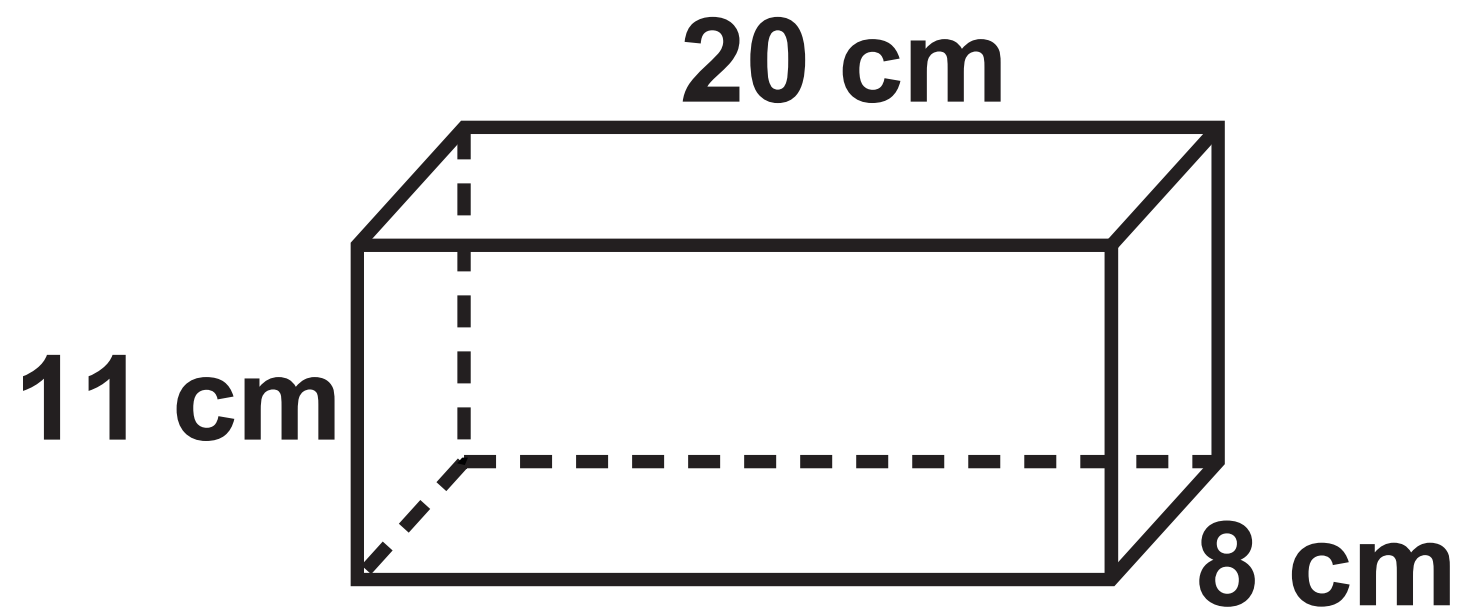
Monday	<div><div></div><div></div><div></div><div></div></div> <div><div></div><div></div><div></div><div></div></div> <div><div></div><div></div><div></div><div></div></div> <div><div></div><div></div></div>
Tuesday	<div><div></div><div></div><div></div><div></div></div> <div><div></div><div></div><div></div><div></div></div> <div><div></div><div></div><div></div><div></div></div> <div><div></div><div></div><div></div></div>
Wednesday	<div><div></div><div></div><div></div><div></div></div> <div><div></div><div></div><div></div><div></div></div> <div><div></div><div></div><div></div><div></div></div> <div><div></div><div></div><div></div><div></div></div> <div><div></div><div></div><div></div><div></div></div>
Thursday	<div><div></div><div></div><div></div><div></div></div> <div><div></div><div></div><div></div><div></div></div> <div><div></div><div></div><div></div><div></div></div> <div><div></div><div></div><div></div></div> <div><div></div><div></div></div>
Friday	

Question 3(a)

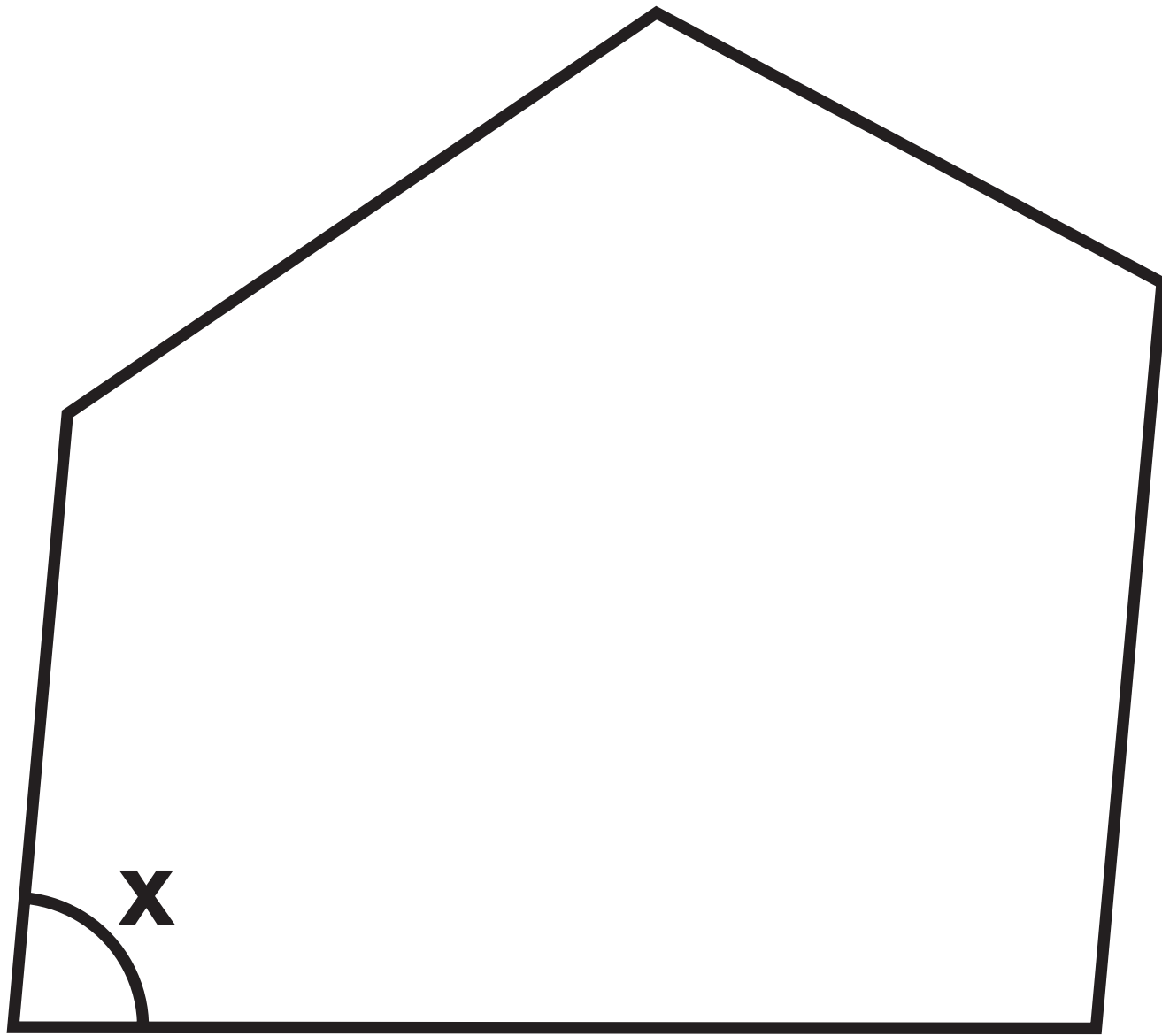




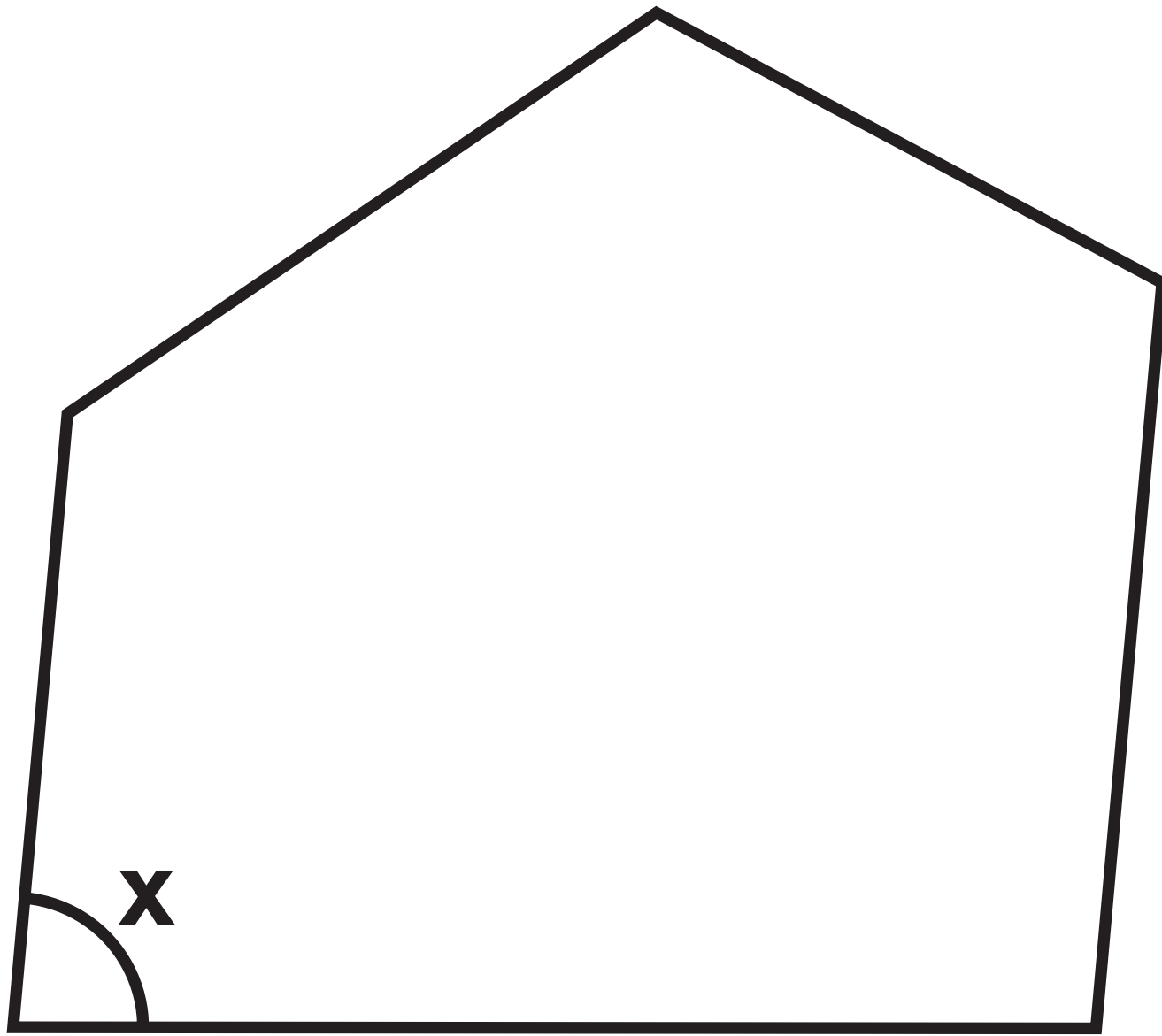
Questions 3(b) and 3(c)



Question 4

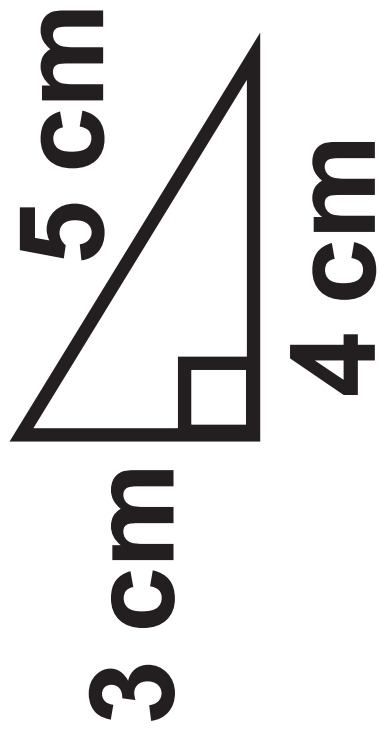


Question 4

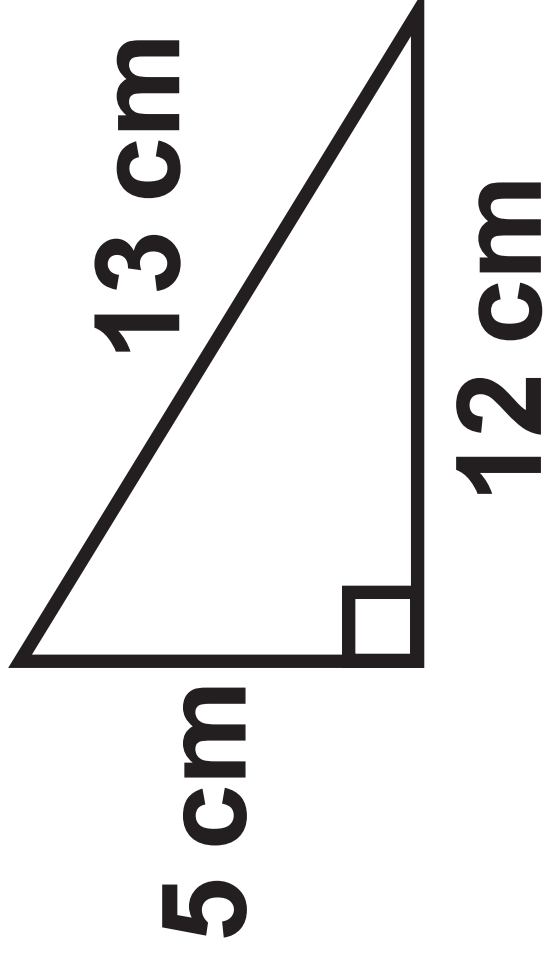


Question 4(d)

Triangle A



Triangle B



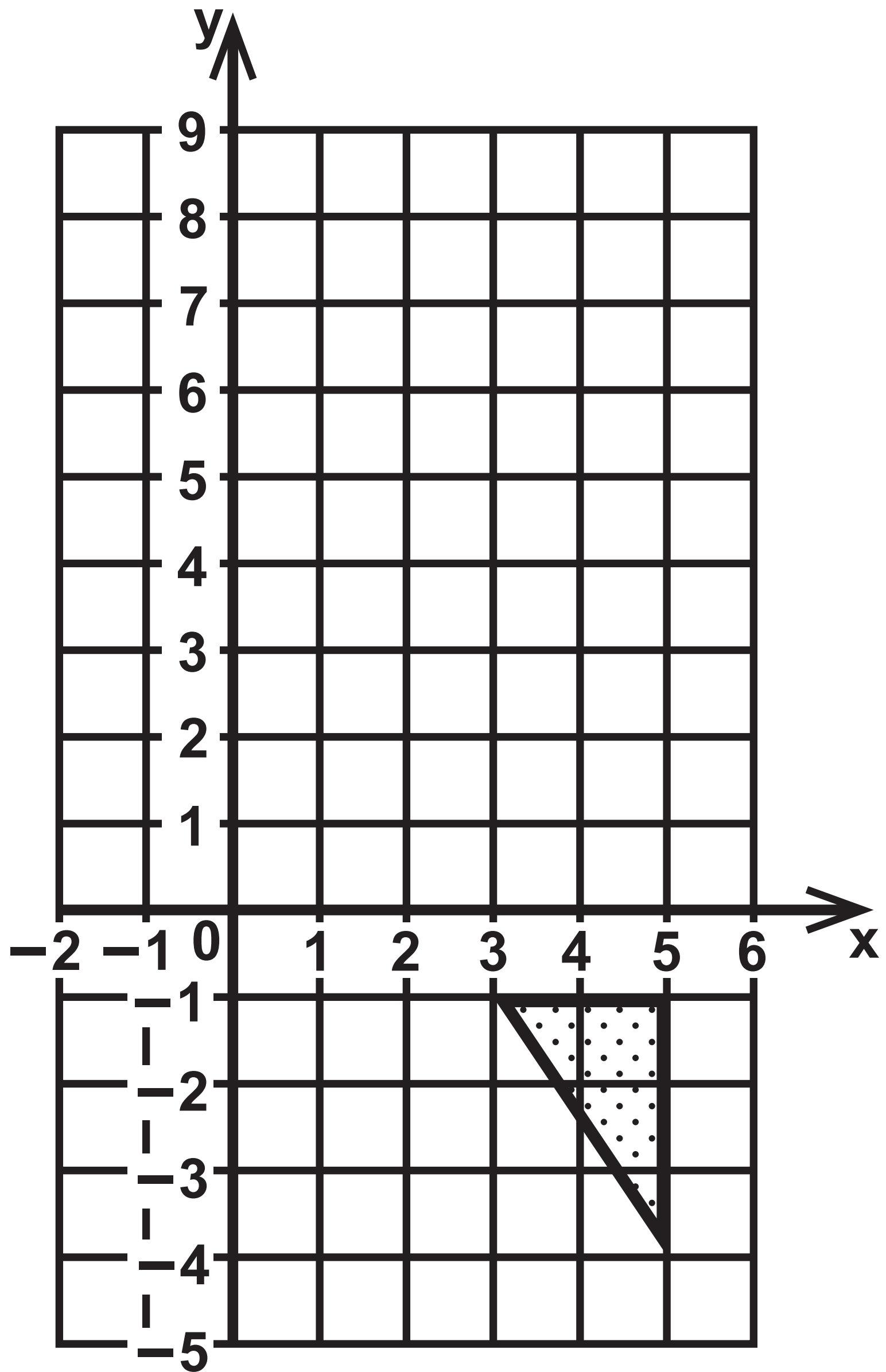
Question 8

	Europe	Africa	Asia	Total
Male		3	16	29
Female	14			
Total		9		60

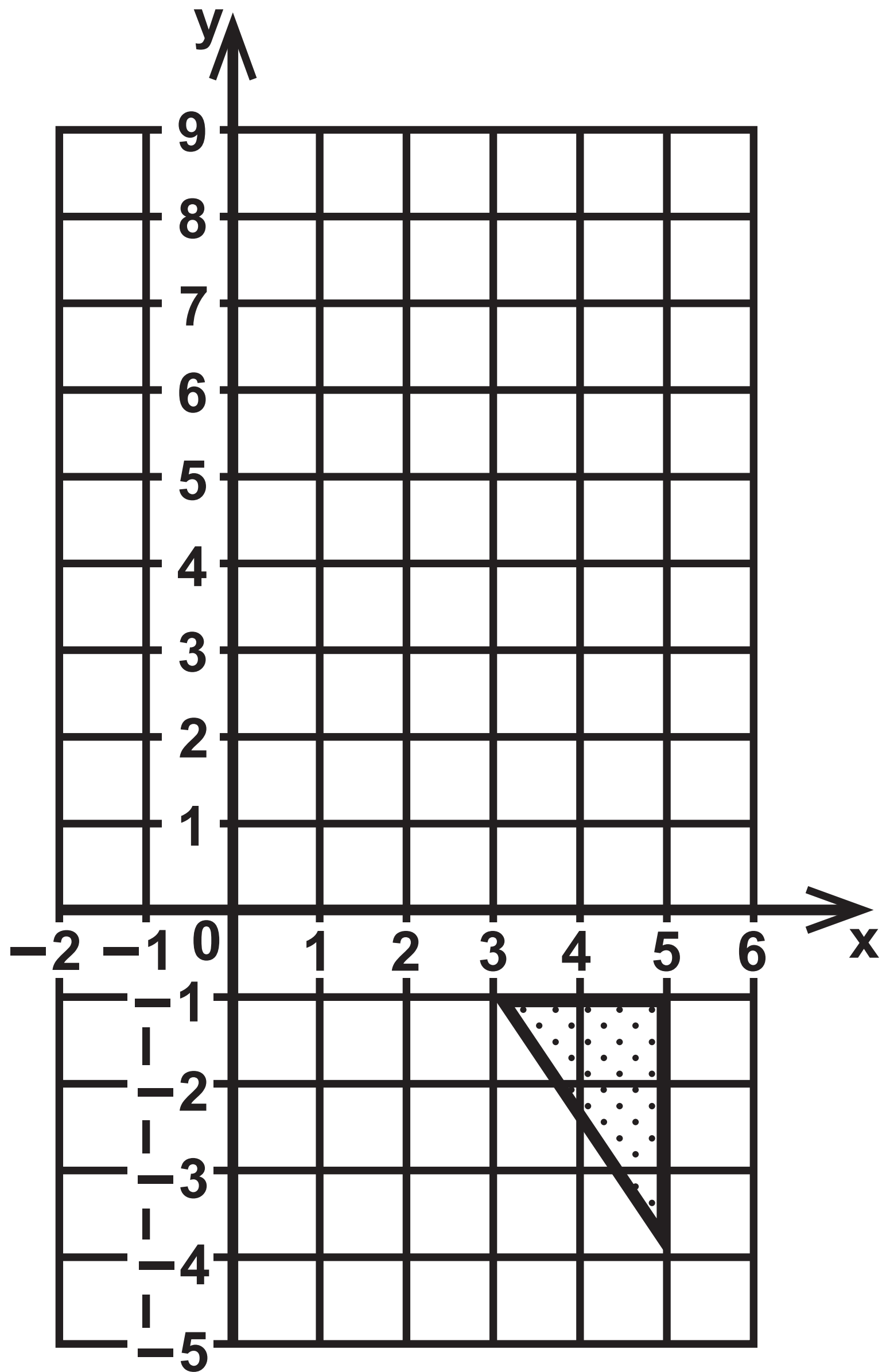
Question 8

	Europe	Africa	Asia	Total
Male		3	16	29
Female	14			
Total		9		60

## Question 13(a)

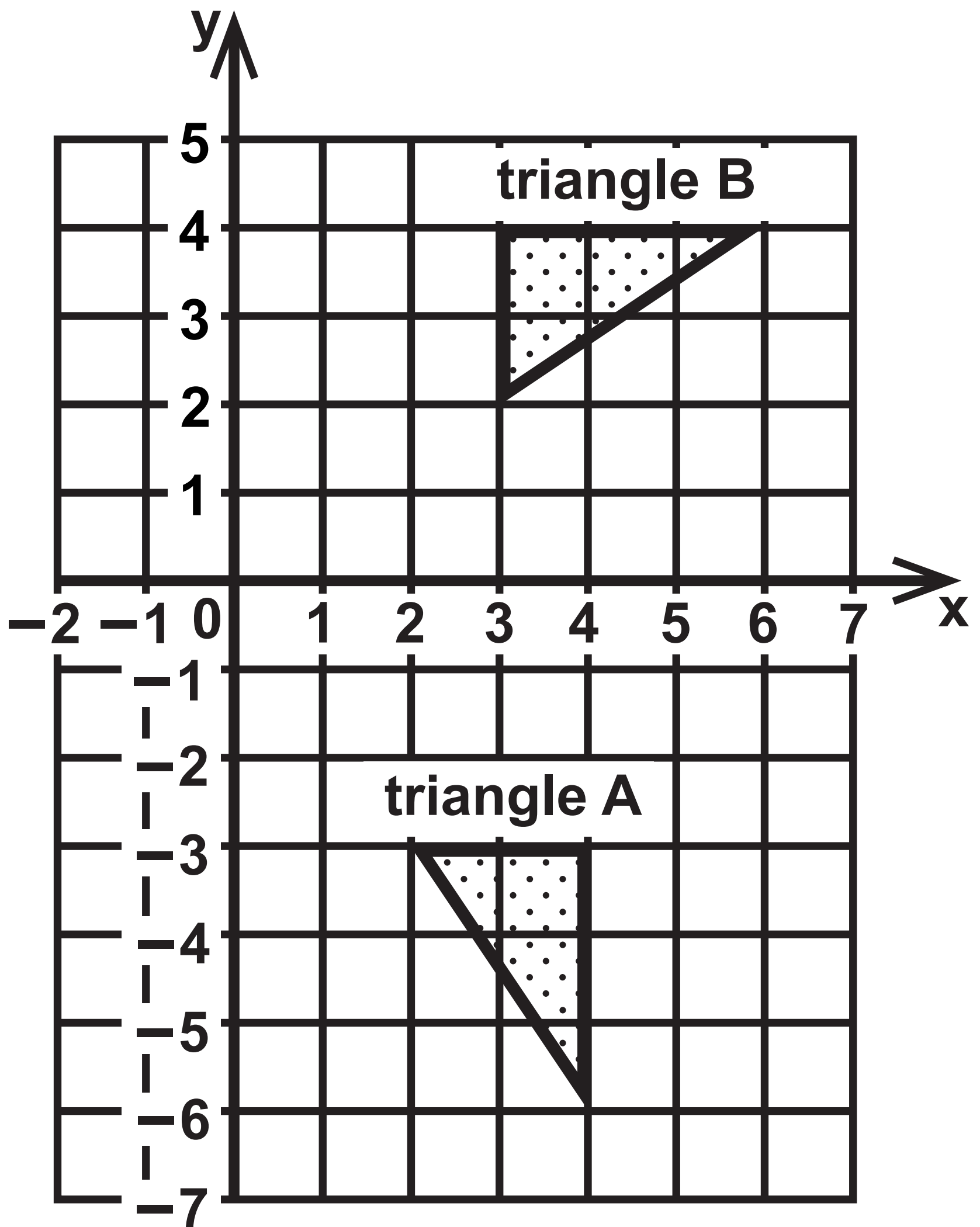


## Question 13(a)

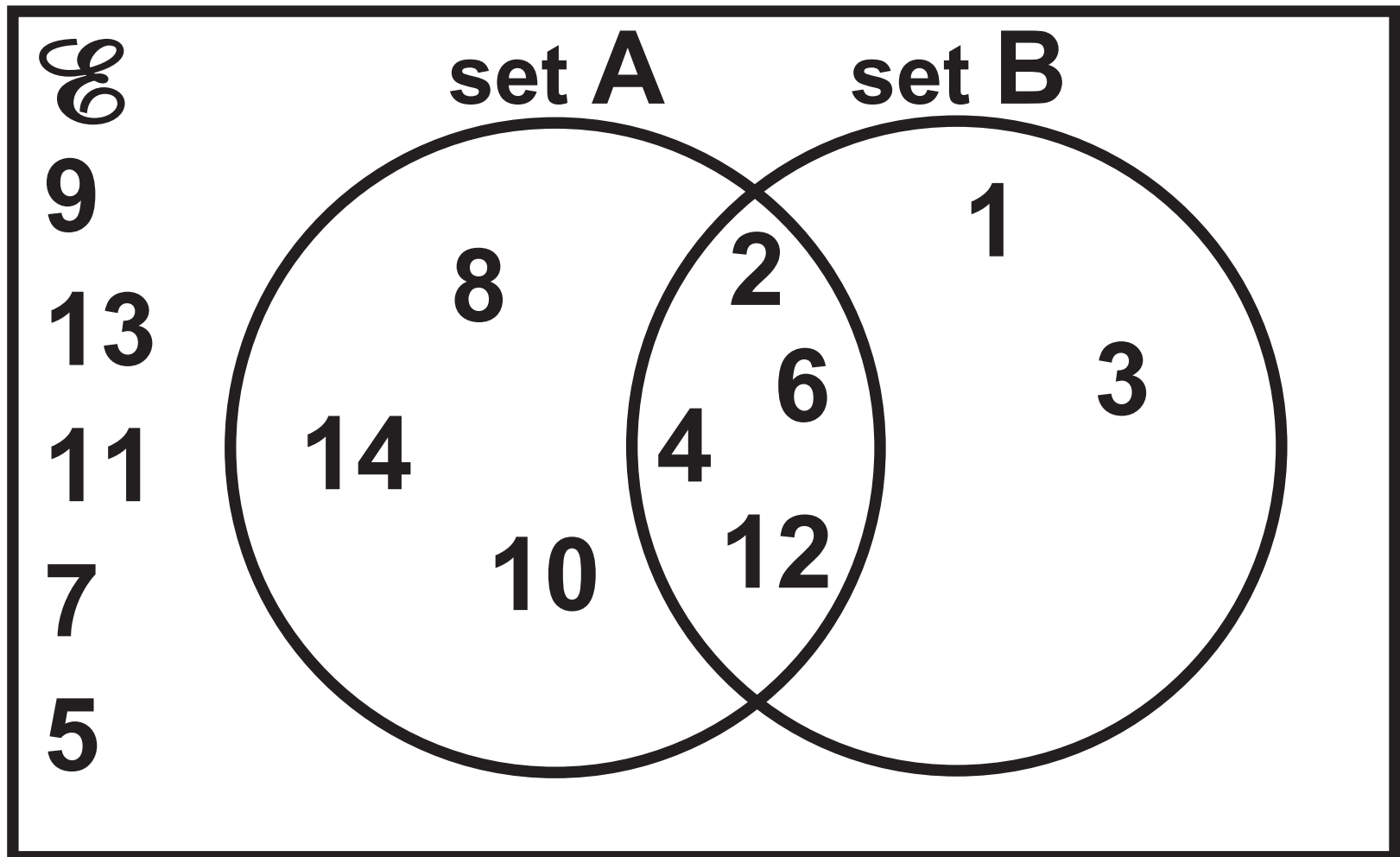


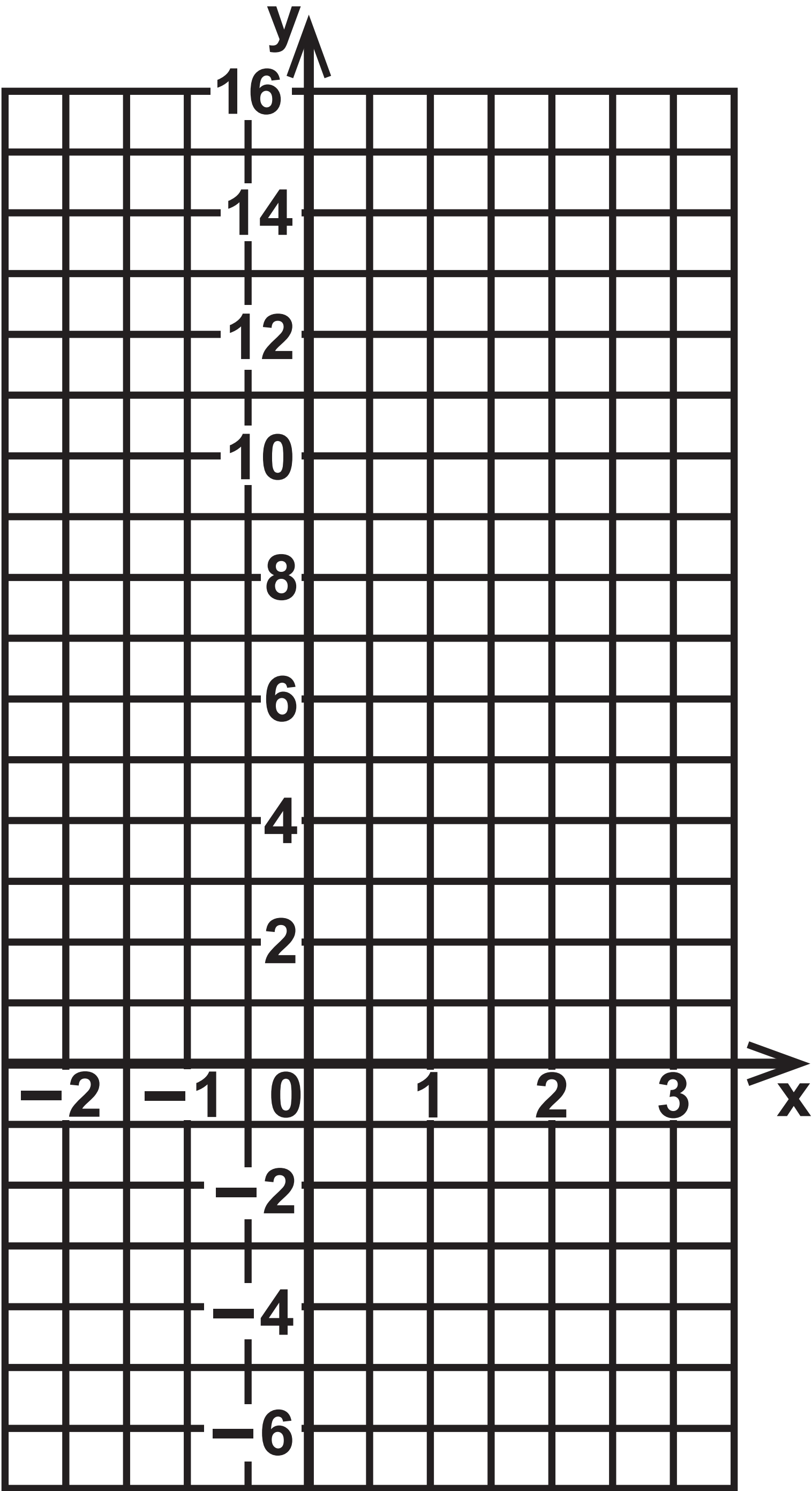


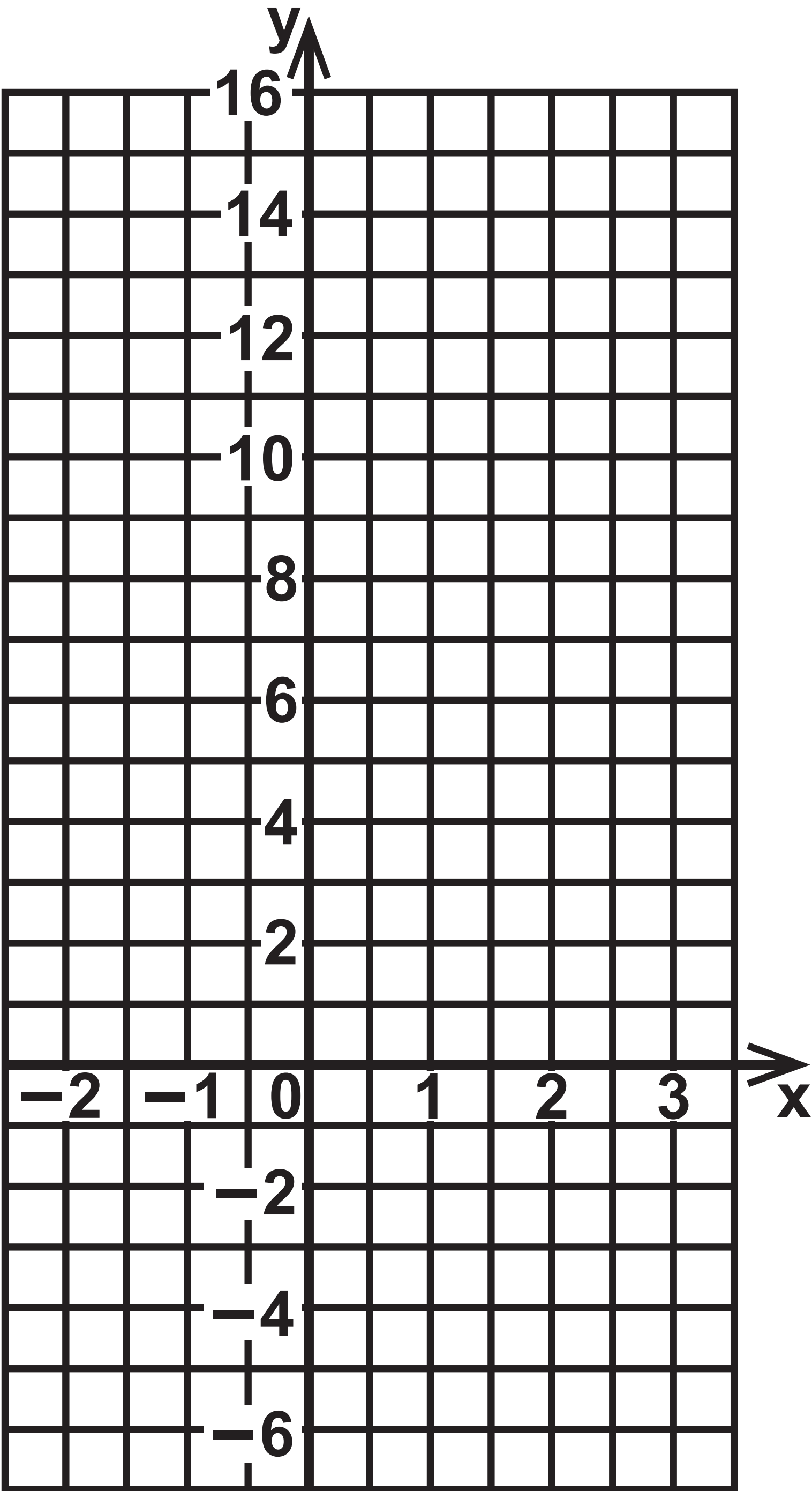
Question 13(b)



# Question 14







# Question 21

